

# GLI ANIMALI

## QUANTE SONO LE ZAMPE?

■ Osserva i disegni e scrivi quante sono le zampe dei seguenti animali.



---



---




---




---



---



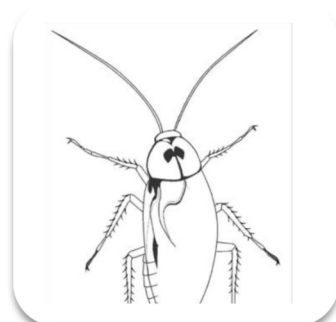
---



---



---



---